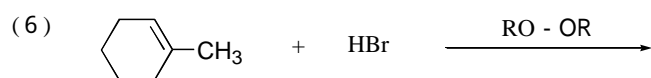
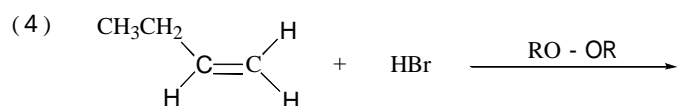
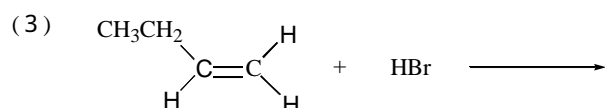
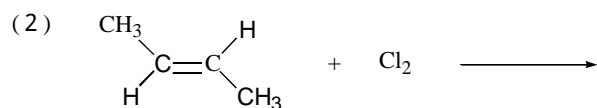
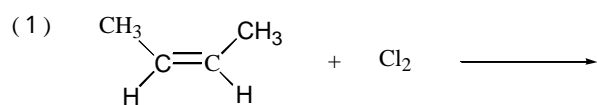
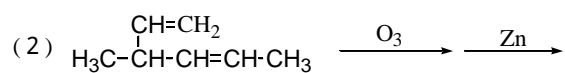
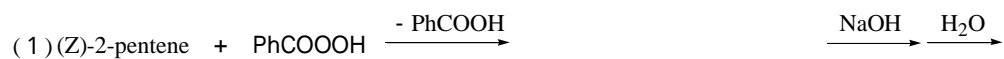


～炭素-炭素多重結合への付加反応～

問題1．次の各反応の主生成物を記せ。但し、(1)(2)はNewman投影図を用いて答えよ。



問題2．次の各反応の生成物を記せ。



Fischer



Fischer

